

Progress check

# Year 5

## Mathematics

### Paper 1: arithmetic

First name						
Middle name						
Last name						
Date of birth	Day		Month		Year	
Teacher						

These assessments have been designed by White Rose Maths.  
For more information, please visit [www.whiterosemaths.com](http://www.whiterosemaths.com)



**[BLANK PAGE]**

Please do not write on this page.

# Instructions

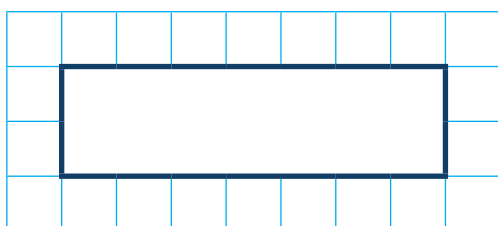
You **may not** use a calculator to answer any questions in this test.

## Questions and answers

You have **20 minutes** to complete this test.

Work as quickly and as carefully as you can.

Put your answer in the box for each question.

A grid consisting of 10 columns and 5 rows of small squares. A larger, bold-bordered rectangle is drawn in the center, spanning 6 columns and 2 rows of the grid cells.

If you cannot do one of the questions, **go on to the next one**.

You can come back to it later, if you have time.

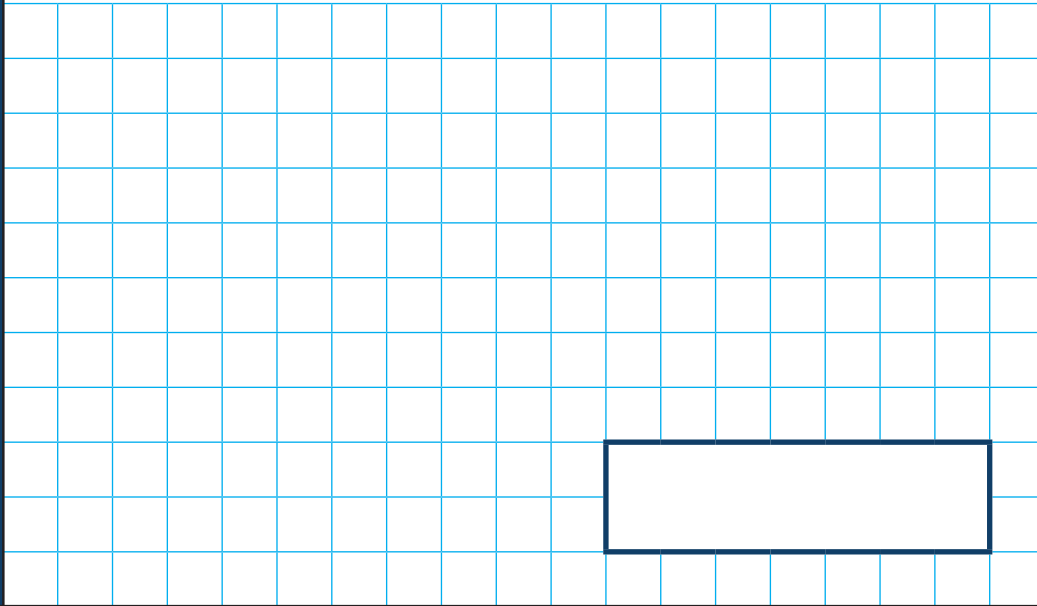
If you finish before the end, **go back and check your work**.

## Marks

The number under each box at the side of the page tells you the maximum number of marks for each question.

1

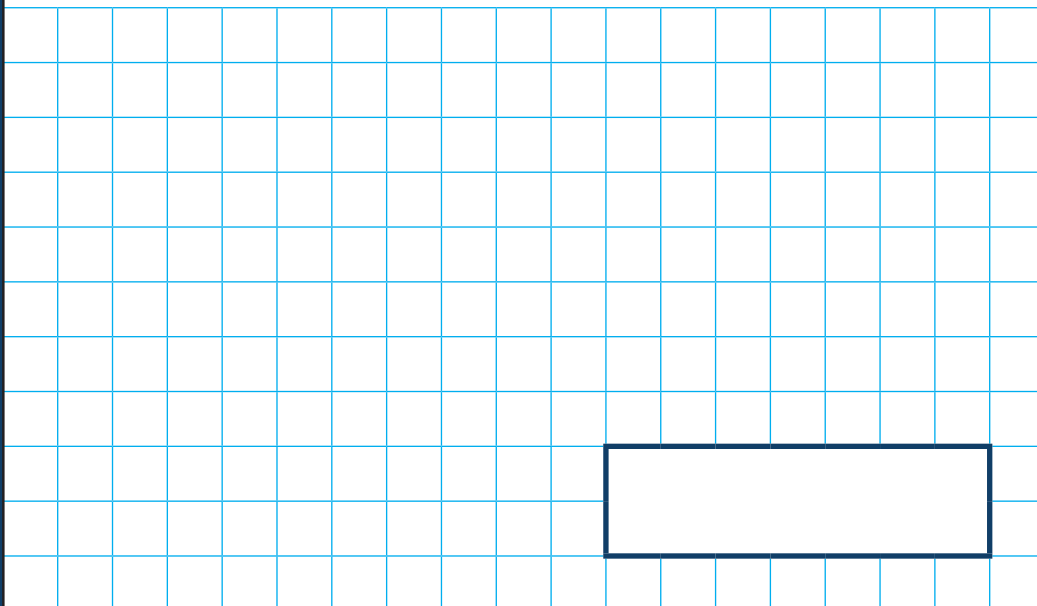
$$760 + 339 =$$



1 mark

2


$$588 - 39 =$$



1 mark

3

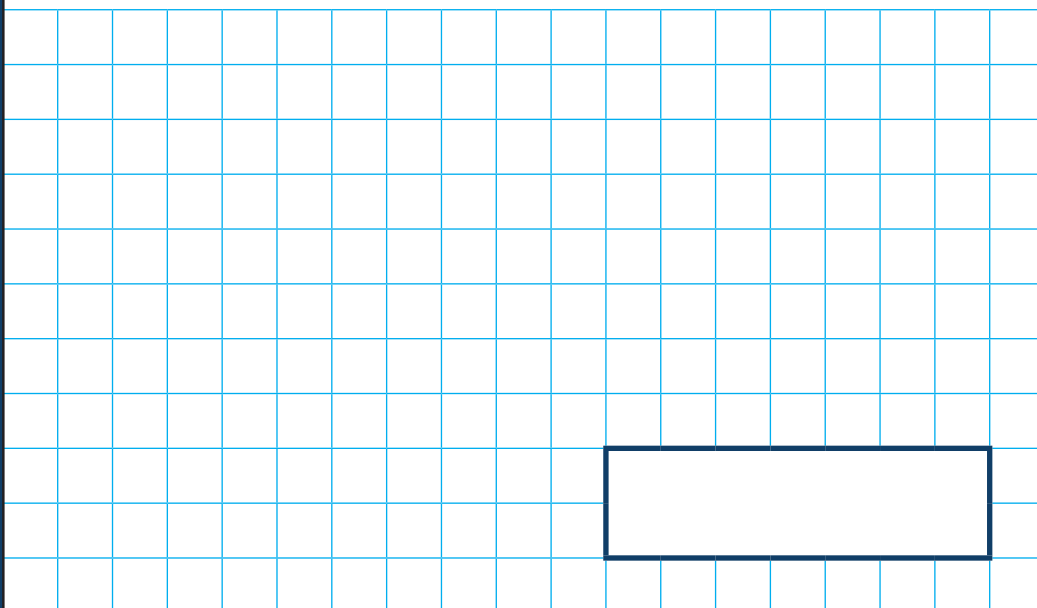
$$35 \times \boxed{\phantom{000}} = 3,500$$



1 mark

4

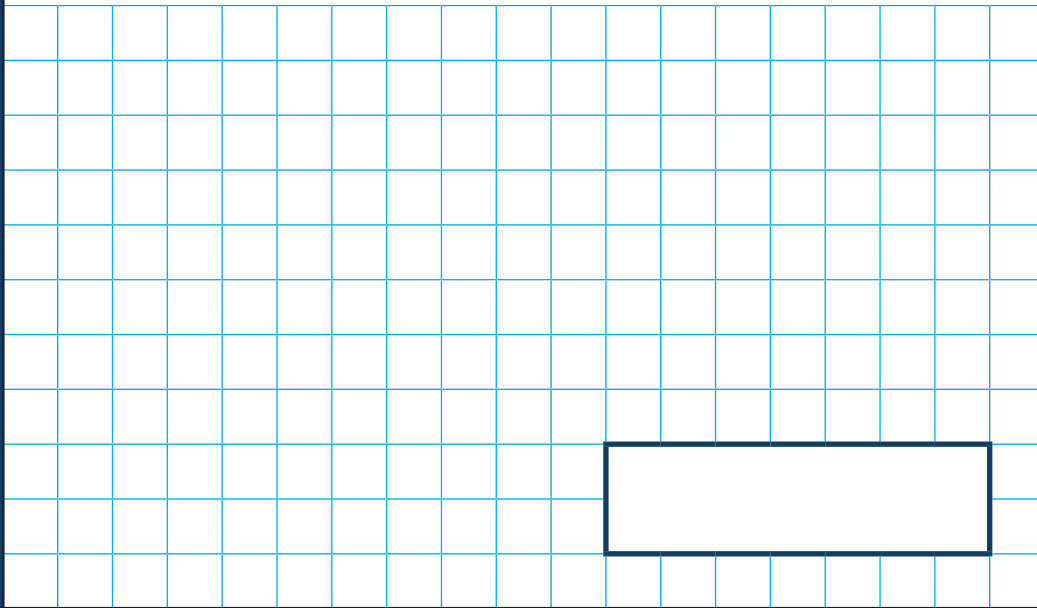
$$56 \div 8 =$$



1 mark

5

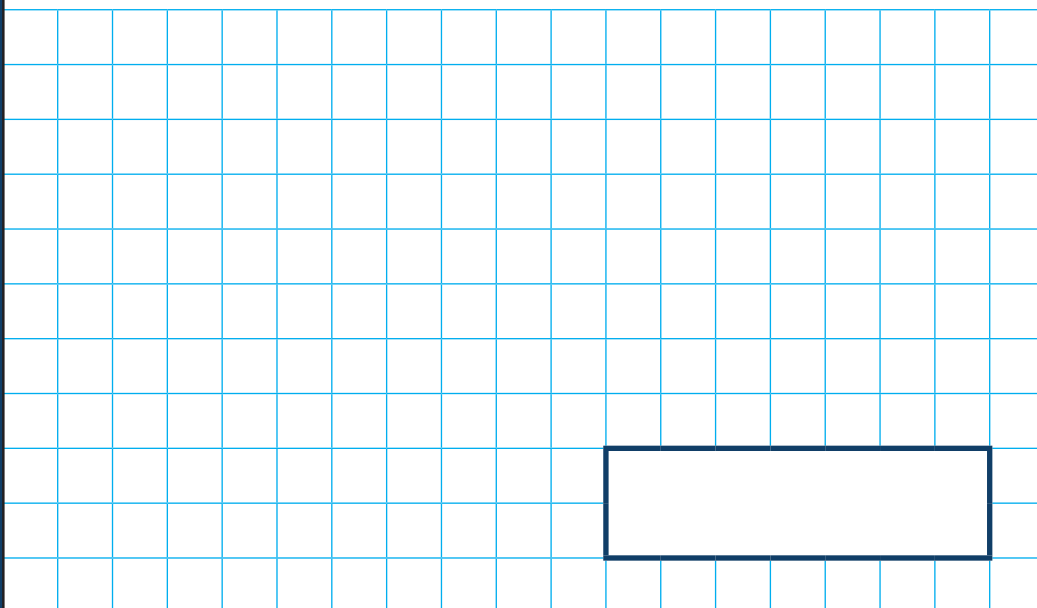
2,523 rounded to the nearest 1,000 is



1 mark

6

$6,357 + 32,054 =$



1 mark

7

$$2,503 + \boxed{\phantom{0000}} = 5,000$$

1 mark

8

$$47 \times 5 =$$

1 mark

9

Subtract one hundred and five from three hundred and forty-two

A large grid of 20 columns and 15 rows, intended for students to show their working out for the subtraction problem.

1 mark

10

$$357 = 457 -$$

A large grid of 20 columns and 15 rows, intended for students to show their working out for the equation.

1 mark



11

$$1,800 = 3 \times \boxed{\phantom{000}} \times 100$$

1 mark

12

Thirty-six thousands and seven tens =

1 mark

13

$$= 299 \div 1$$

1 mark

14

$$630 \div 7 =$$

1 mark

15

$$10,000 - 4,813 =$$

1 mark

16

$$8 \times \boxed{\phantom{000}} = 96$$

1 mark

17

$4^2 =$

1 mark

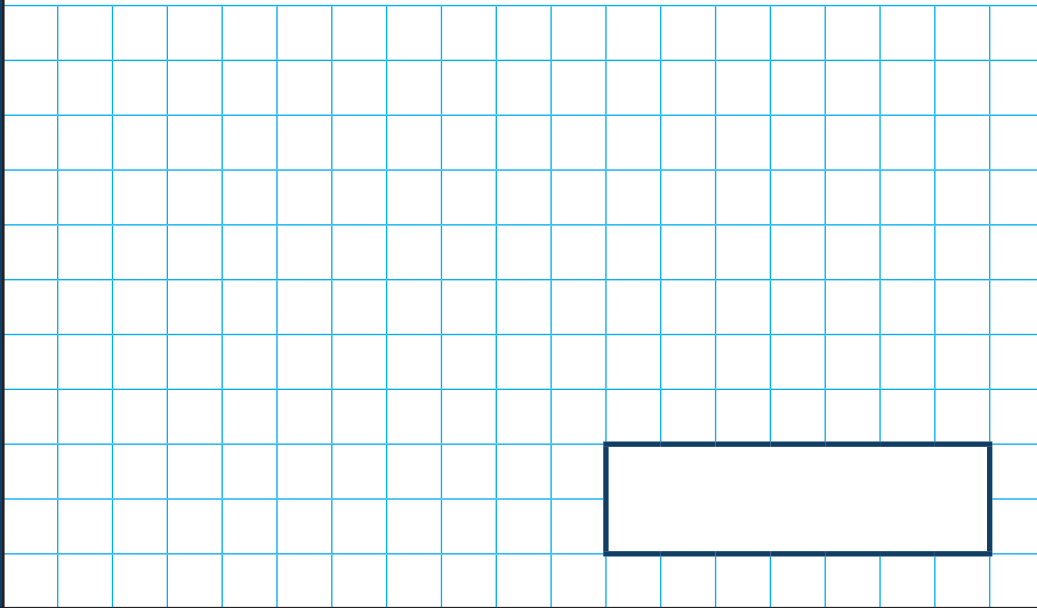
18

$48 \div 2 = \text{ } \times 4$

1 mark

19


$$6 \times 7 \times 4 =$$



1 mark

20

$$3,592 + 1,390 = 3,390 +$$



1 mark

**[BLANK PAGE]**

Please do not write on this page.

**[BLANK PAGE]**

Please do not write on this page.

**[BLANK PAGE]**

Please do not write on this page.