

Spring Progress Check

Year 1

Mathematics

Paper 2: reasoning and problem solving

First name						
Middle name						
Last name						
Date of birth	Day		Month		Year	
Teacher						

These assessments have been designed by White Rose Maths.
For more information, please visit www.whiterosemaths.com




[BLANK PAGE]

Please do not write on this page.

1

There are 6 cookies in a jar.
Tom eats 4 cookies.
How many are left?



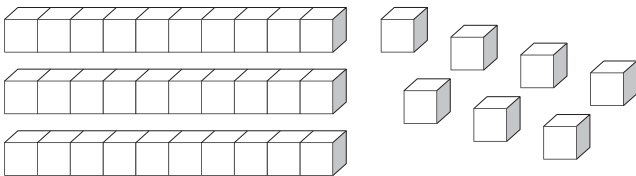
cookies




1 mark

2

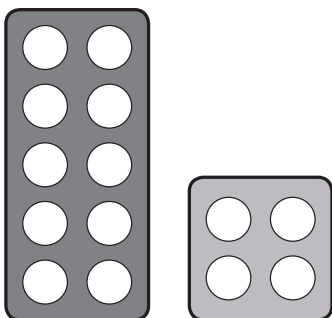
Match each representation to the correct number.



14



37



40



2 marks

3

Complete the missing numbers.

25	30	35		
----	----	----	--	--

50	40		20	
----	----	--	----	--


	4	6	8	
--	---	---	---	--




3 marks

4

Kim and Tom have each made a number.



Kim's number



Tom's number

Choose a card to make the sentence correct.

more than

equal to

less than

Kim's number is _____ Tom's number.




1 mark

5

Which item is the heaviest?

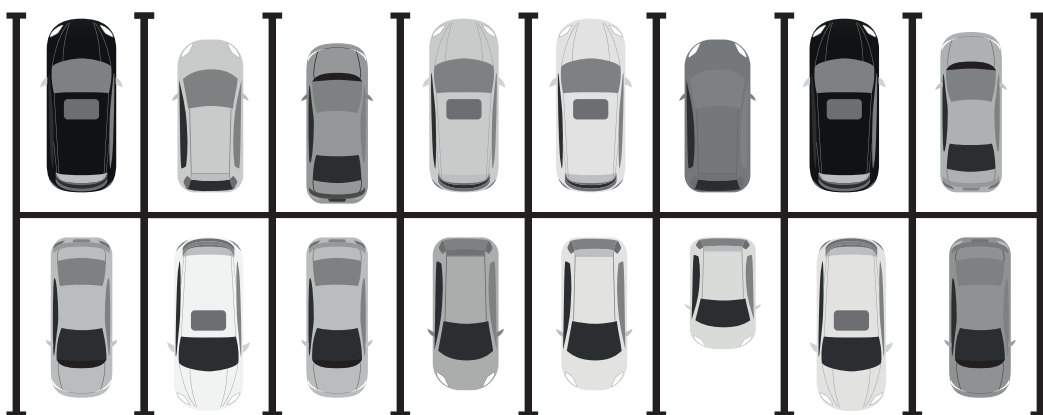
Tick your answer.



1 mark

6

This morning, there were 16 cars in the carpark.



Some cars leave.

Now there are 5 cars.

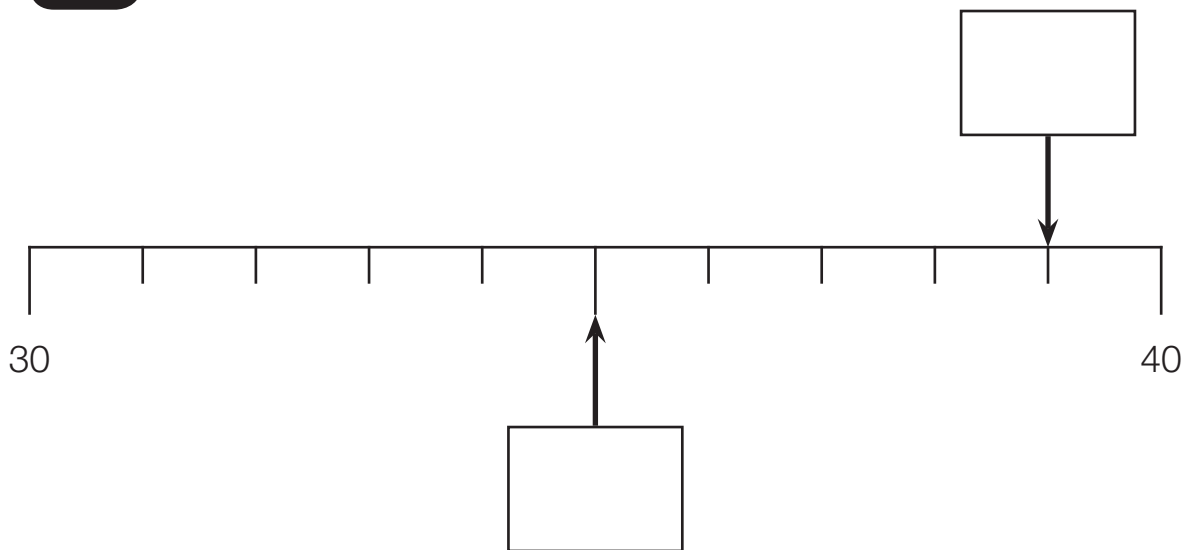
How many cars have left the carpark?



1 mark

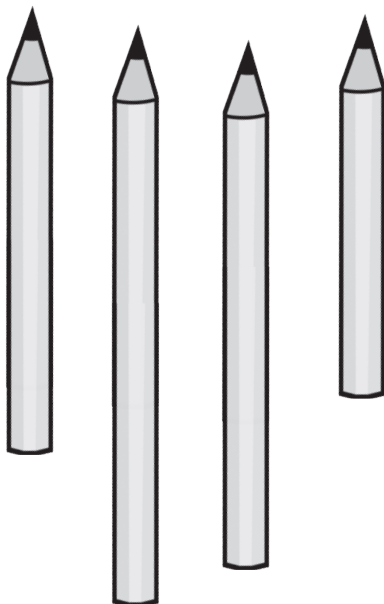
7

Write the correct number in each box.



8

Tick the longest pencil.



2 marks



1 mark

9

Complete the sum.

$$\boxed{9} + \boxed{} = \boxed{15}$$

Two different **1-digit** numbers are added to make 15
Complete the boxes.

$$\boxed{} + \boxed{} = \boxed{15}$$




1 mark




1 mark

10

Kim and Tom each have the same amount of juice in their glass.



Kim



Tom

Kim and Tom drink some juice.

Here is what is left.



Kim



Tom

Who drank the most juice?

Kim

Tom

END OF TEST



1 mark

[BLANK PAGE]

Please do not write on this page.

[BLANK PAGE]

Please do not write on this page.

[BLANK PAGE]

Please do not write on this page.